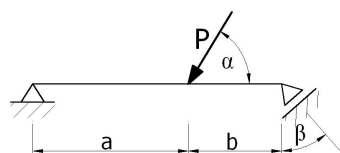


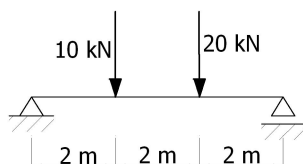
Lista zadań nr 5

1. Dla poniższych układów wyznaczyć reakcje podporowe analitycznie i graficznie a następnie siły przekrojowe analitycznie.

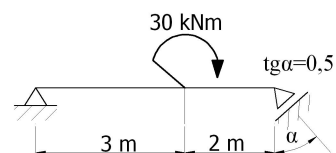
a)



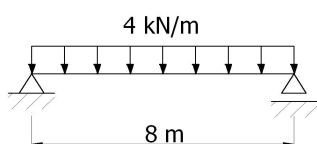
b)



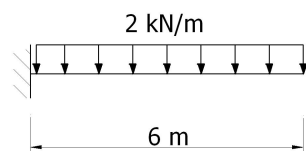
c)



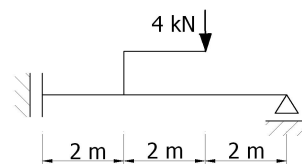
d)



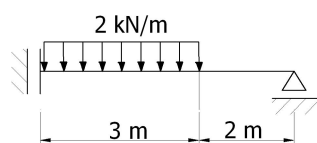
e)



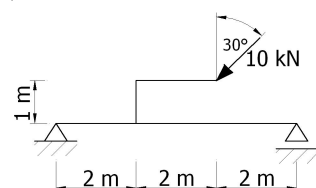
f)



g)



h)



i)

